

The “Not So Obvious” Quiz

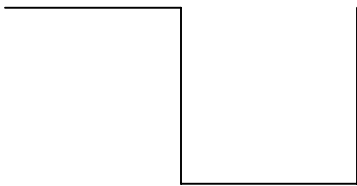
Name _____

page 1 of 1

Each of the three questions below has two (2) ‘obvious’ answers. Can you find both?

1) What is the next number in the following series 3 6 9 12 ?

2) Can you move one (1) line segment to make a perfect square?



3) Can you connect the dots with the shortest possible line?




The "Not So Obvious" Quiz - Answer Key


1) a) 3, 6, 9, 12, 15

b) 3, 6, 9, 12, 3 the times on a clock every 15 minutes

2) a)



b) the number 4 is a perfect square



3) a) ● ————— ●

b) Write "the shortest possible line" between the dots.